

Cambridge IGCSE™

CANDIDATE
NAME

CENTRE
NUMBER

--	--	--	--	--

CANDIDATE
NUMBER

--	--	--	--

MATHEMATICS

0580/11

Paper 1 (Core)

October/November 2023

1 hour

You must answer on the question paper.

You will need: Geometrical instruments

INSTRUCTIONS

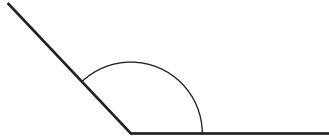
- Answer **all** questions.
- Use a black or dark blue pen. You may use an HB pencil for any diagrams or graphs.
- Write your name, centre number and candidate number in the boxes at the top of the page.
- Write your answer to each question in the space provided.
- Do **not** use an erasable pen or correction fluid.
- Do **not** write on any bar codes.
- You should use a calculator where appropriate.
- You may use tracing paper.
- You must show all necessary working clearly.
- Give non-exact numerical answers correct to 3 significant figures, or 1 decimal place for angles in degrees, unless a different level of accuracy is specified in the question.
- For π , use either your calculator value or 3.142.

INFORMATION

- The total mark for this paper is 56.
- The number of marks for each question or part question is shown in brackets [].

This document has **12** pages. Any blank pages are indicated.

1



Write down the mathematical name for this type of angle.

..... [1]

2 Write down the value of the 8 in the number 58 317.

..... [1]

3 Complete these statements.

(a) When $x = \dots\dots\dots$, $x + 3 = 8$.

[1]

(b) When $7y = 63$, $10y = \dots\dots\dots$

[1]

4 Find the value of $\sqrt[3]{5832}$.

..... [1]

5 A watch costs \$12 400.
In a sale there is a discount of 16%.

Calculate the amount of the discount.

\$ [1]

6 (a) Mei writes down five integers.

- The lowest integer is 8.
- The range is 9.
- The median is 15.
- The total of the five integers is 66.
- There is no mode.

Write down the five integers.

.....,,,, [3]

(b) Huan writes down four numbers.
The mean of these four numbers is 17.

He writes down a fifth number.
The mean of these five numbers is 20.

Find the fifth number.

..... [3]

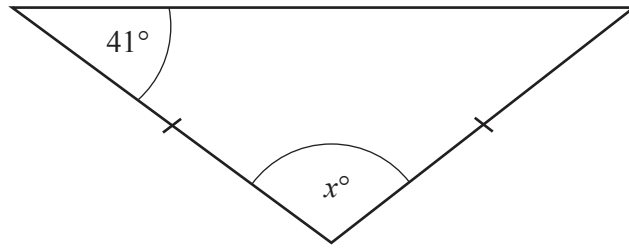
7 Arjun lives in Delhi and Haru lives in Tokyo.
They play a computer game online at the same time.

They start at 14 45 Tokyo local time.
The game lasts 3 hours 50 minutes.
The local time in Delhi is 3 hours 30 minutes behind the local time in Tokyo.

Find the local time in Delhi when the game finishes.

..... [2]

- 8 The diagram shows an isosceles triangle.



NOT TO
SCALE

Find the value of x .

$x =$ [2]

- 9 The stem-and-leaf diagram shows the time, in minutes, it takes each of 15 people to complete a race.

1	6 6 7
2	1 3 3 4 5 6 7 7 7
3	0 1 1

Key: 1|6 represents 16 minutes

Find

- (a) the mode

..... min [1]

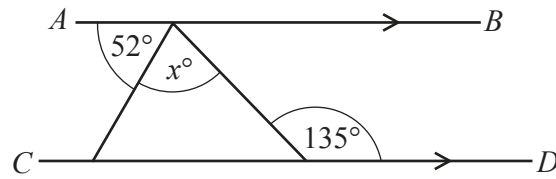
- (b) the range

..... min [1]

- (c) the median.

..... min [1]

10

NOT TO
SCALE

AB and CD are parallel lines.

Find the value of x .

$x =$ [2]

11 Write 0.03682 correct to 2 significant figures.

..... [1]

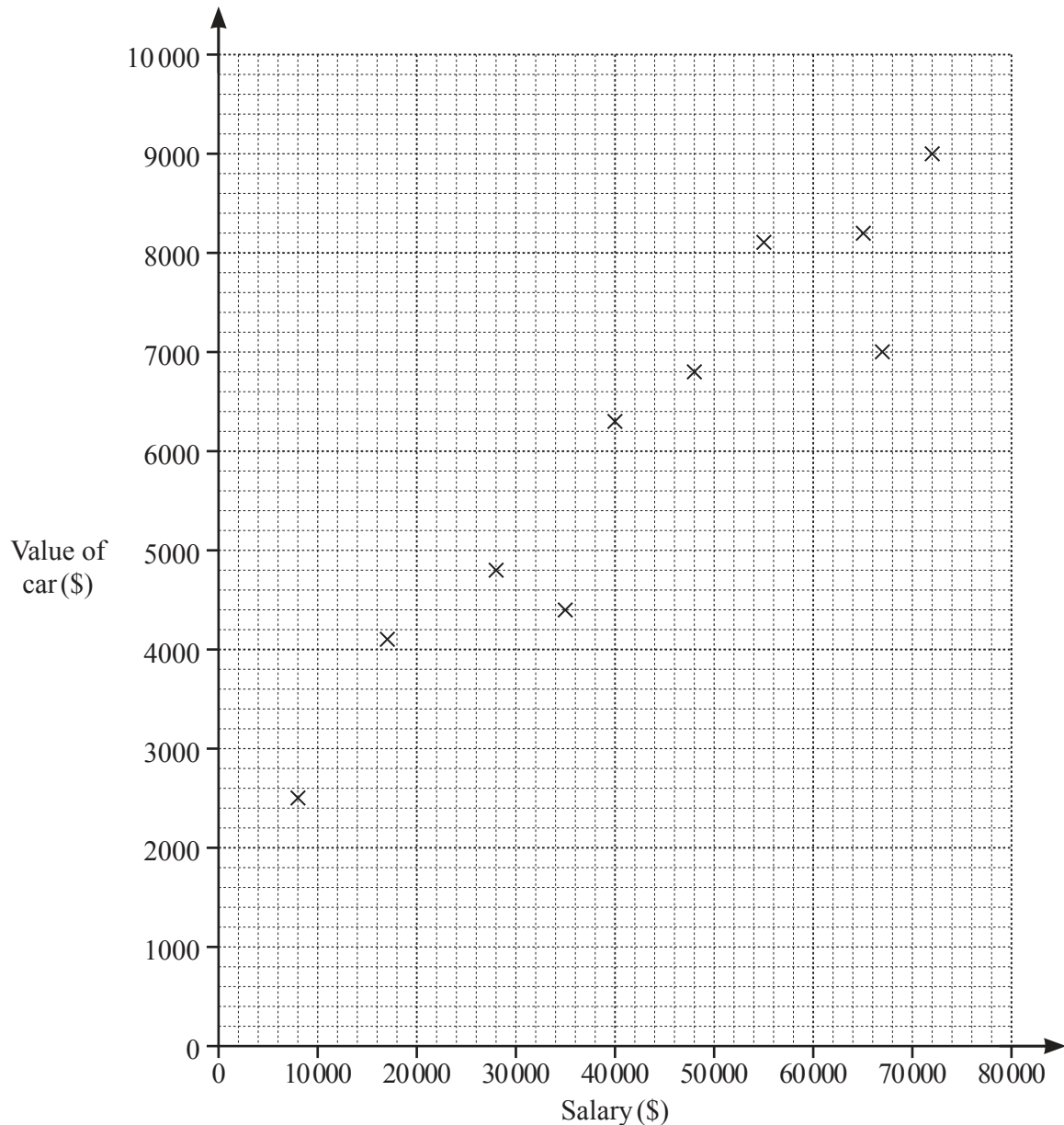
12 The table shows some information about Amir's shopping.

Fruit	Cost per kilogram	Number of kilograms Amir buys	Cost
Oranges	\$2.35	3.2	\$.....
Bananas	\$.....	2.8	\$.....
Total			\$13.54

Complete the table.

[3]

- 13 For each of 10 people working in an office, the scatter diagram shows their salary and the value of their car.



- (a) One of these people has a salary of \$28 000.

Find the value of their car.

\$ [1]

- (b) Another person starts to work in the office.
Their salary is \$54 000 and the value of their car is \$6100.

Plot this information on the scatter diagram.

[1]

- (c) What type of correlation is shown in the scatter diagram?

..... [1]

- 14 Factorise completely.

$$42mk - 35m$$

..... [2]

- 15 Find the highest common factor (HCF) of 140 and 126.

..... [2]

- 16 Simplify.

(a) $n^5 \times n$

..... [1]

(b) $8x^6 \div 2x^2$

..... [2]

- 17 The circumference of a circle is 59 cm.

Calculate the radius of the circle.

..... cm [2]

- 18 By writing each number in the calculation correct to 1 significant figure, find an estimate for the value of

$$\frac{36.9 + 24.2}{3.8 - 1.2}$$

You must show all your working.

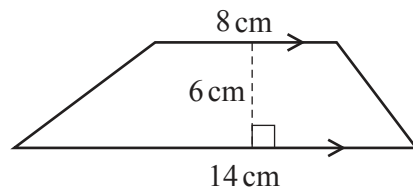
..... [2]

- 19 Indira invests \$6000 at a rate of $r\%$ per year simple interest. At the end of 4 years the value of her investment is \$6840.

Find the value of r .

$r =$ [3]

20



NOT TO
SCALE

Find the area of this trapezium.

..... cm^2 [2]

21 (a) Write these numbers in standard form.

(i) 45 000

..... [1]

(ii) 0.0063

..... [1]

(b) Calculate $8.2 \times 10^{-1} \times 150\,000$.
Give your answer in standard form.

..... [2]

22 The length, s metres, of a ship is 287 m, correct to the nearest metre.

Complete this statement about the value of s .

..... $\leq s <$ [2]

23 The table shows the number of people in a town who are left-handed and the number who are right-handed.

	Left-handed	Right-handed	Total
Number of people	8 400	48 600	57 000

Write down the probability that a person, chosen at random, is left-handed.

..... [1]

24 (a) Change 1.2 m^2 into mm^2 .

..... mm^2 [1]

(b) The speed limit on a road is 80 km/h .
Sophie drives at a speed of 1200 m/min .

Show that Sophie drives at a speed lower than the speed limit.

[2]

25 Calculate the area of a semicircle with radius 10 cm .

..... cm^2 [2]

BLANK PAGE

Permission to reproduce items where third-party owned material protected by copyright is included has been sought and cleared where possible. Every reasonable effort has been made by the publisher (UCLES) to trace copyright holders, but if any items requiring clearance have unwittingly been included, the publisher will be pleased to make amends at the earliest possible opportunity.

To avoid the issue of disclosure of answer-related information to candidates, all copyright acknowledgements are reproduced online in the Cambridge Assessment International Education Copyright Acknowledgements Booklet. This is produced for each series of examinations and is freely available to download at www.cambridgeinternational.org after the live examination series.

Cambridge Assessment International Education is part of Cambridge Assessment. Cambridge Assessment is the brand name of the University of Cambridge Local Examinations Syndicate (UCLES), which is a department of the University of Cambridge.